

Massachusetts Institute of Technology
Department of Chemistry
5.33 Advanced Chemical Instrumentation
FALL SEMESTER 2005

EXPERIMENT #2A: MAGNETIC RESONANCE SPECTROSCOPY

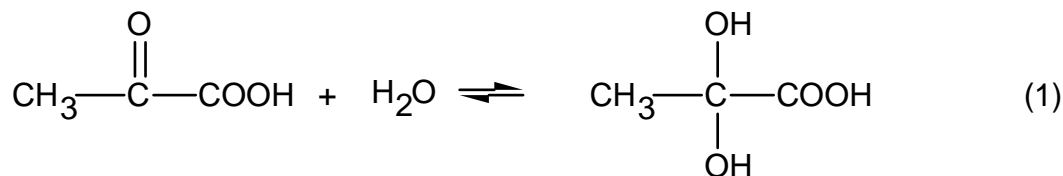
I. Introduction

Magnetic resonance spectroscopy is one of the most widely used techniques in chemistry. Both nuclear-spin (NMR) spectroscopy and electron-spin resonance (ESR) spectroscopy provide important information about chemical systems. Applications of NMR to the analysis of chemical systems, which you have already encountered in organic chemistry and laboratory subjects, include use of the spectrum as a qualitative means of identifying particular molecules and quantitative examination of intramolecular interactions which determine chemical shift and coupling in proton spectra. The positions of bands reflect intramolecular chemical shifts and spin-spin splitting interactions and also give data on the formation of molecular complexes (which might be viewed as extended molecular species having their own intramolecular interactions).

In this experiment, you will explore two tools that are widely used in the determination of reaction mechanisms, be they organic, biochemical, organometallic, or inorganic. These are: the use of variable temperature NMR (VT-NMR) and line-shape analysis. Line shape analysis includes two components:

- (1) the relative areas of the bands give the relative numbers (concentrations) of different types of nuclei present;
- (2) the width of bands in systems where exchange is occurring gives information on the mean lifetimes of nuclei in various environments.

The model system you will be studying is the interaction of pyruvic acid with water, by itself as well as under acidic conditions. The reaction is represented by the equilibrium:



You are going to obtain two sets of data on this system. The set measured at room temperature will allow you to draw conclusions about the dependence of the reaction mechanism on the acidity of the medium. The VT set will allow you to draw conclusions

about the temperature dependence of the equilibrium and rate constants. In your report, you should discuss what your data tell you about the reaction mechanism, and what it does not.

II. References

A.E. Derome, *Modern NMR Techniques for Chemistry Research*, Pergamon Press, New York, 1987.

E.F.H. Brittain, W.O. George, and C.H.J. Wells, *Introduction to Molecular Spectroscopy, Theory and Experiment*, Academic Press, New York, 1970.

J. Sandstrom, *Dynamic NMR Spectroscopy*, Academic Press, New York, 1982.

J. Kaplan and G. Fraenkel, *NMR of Chemically Exchanging Systems*, Academic Press, New York, 1980.

H. Friebolin, *Basic One- and Two-Dimensional NMR Spectroscopy*, 2nd Ed. (VCH Publishers, 1993).

Also see Experiment 21, pp. 256-264, in C. W. Garland, J. W. Nibler and D. P. Shoemaker *Experiments in Physical Chemistry*, 7th Edition, McGraw-Hill Publishing Co., New York, 2003.

Related discussion may be found in:

J. R. Dyer, *Applications of Absorption Spectroscopy of Organic Compounds*, Prentice-Hall, Englewood Cliffs, N.J., 1965, Chapter 4, pp. 58-132.

D. J. Pasto and C. R. Johnson, *Organic Structure Determination*, Prentice-Hall, Englewood Cliffs, N.J., 1979, Chapter 6, pp. 180-264.

III. Experimental

This experiment will be done by groups of three students. Lab partners should use part A to acquaint themselves with the operation of the NMR instrument with the assistance and supervision of the TA. Be sure to learn how to obtain expanded scale spectra as they will be needed in parts B and C. Indicate clearly on the spectra and in your notebooks who did what. Each student should obtain the data from the spectra for each part and enter it in her/his own notebook. The further analysis, calculations, and discussion indicated below in Sections IV and V should be done independently. Results and conclusions may be compared.

A. Sample Preparation

The pyruvic acid has been distilled¹ to remove water, decomposition products, and other impurities (see Fig. 1). The day before you are scheduled to do the experiment, obtain a

¹ Boiling points from literature (temperature in °C/pressure in Torr): 165/760 ; 106-108/126; 73/28; 68/17; 60/12.

1 mL sample of distilled pyruvic acid. Store it overnight in as cold a refrigerator as you can find, keeping it away from moisture, light, and oxygen².



Figure 1. Vacuum distillation apparatus for pyruvic acid. See your TAs for details.

Just prior to carrying out the experiment, prepare the following solutions:

- (1) 0.10 mL pyruvic acid + 0.60 mL D₂O
- (2) 0.10 mL pyruvic acid + 0.55 mL D₂O + 0.05 mL HCl
- (3) 0.10 mL pyruvic acid + 0.50 mL D₂O + 0.10 mL HCl
- (4) 0.10 mL pyruvic acid + 0.45 mL D₂O + 0.15 mL HCl
- (5) 0.10 mL pyruvic acid + 0.40 mL D₂O + 0.20 mL HCl
- (6) 0.10 mL pyruvic acid + 0.35 mL D₂O + 0.25 mL HCl

Use concentrated HCl solution (approx. 11.7 M). You will also need 0.025 mL of *t*-butanol.

B. Measurement of the Spectrum

Specific instructions for operation of the NMR instrument that you will be using will be provided before your scheduled time on the spectrometer.

² You may want to give some thought to the effect of temperature, light, moisture, and oxygen on the compound, and therefore on your experimental results.

C. H⁺ dependence

Record the spectrum of pyruvic acid using t-butanol as an internal reference (you should use the methyl peak). Add the t-butanol with a micropipet. Plot the spectrum of (1) between 0 and 10 ppm. Next, expand the spectrum to show only the methyl peaks. Record and plot the spectra of all six solutions at this scale after integrating the two acid methyl resonances and calculating their width at half maximum using the computer. It is possible to record 3 or 4 spectra on the page with the pen plotter in order to save paper (ask TA's how).

D. Temperature Dependence of the Uncatalyzed and Acid-Catalyzed Rate Constants

The temperature dependence of the uncatalyzed rate constant, k_0 , in the pyruvic acid-2,2-dihydroxypropanoic acid equilibrium will be found by recording the spectrum of a mixture of pyruvic acid and water (Sample Tube #1) at various temperatures. The temperature dependence of the acid-catalyzed rates will be found by repeating the measurements (if possible) with Samples Tubes #2 through #6.

Every time you put a new NMR tube in the probe, you should allow it to equilibrate thermally by spinning it inside the probe for about 10 minutes before collecting data³. Since the thermometer inside the probe may not be well calibrated, you may need to calibrate the probe temperature with methanol or ethylene glycol (instructions will be provided).

When varying the temperature, it is important to change the temperature by no more than 20 °C at a time between each equilibration in order to prevent thermal shock to the probe. Ideally, you would take data at 5 degree intervals between room temperature and 70 °C. However, since it may take 10 minutes or so for the tube to come into thermal equilibrium with the probe, you may not have enough time to carry out the entire series. In this case, you will have to make a choice between using larger temperature intervals or smaller intervals over a restricted temperature range. It is also a good idea to use nitrogen gas at elevated temperatures in order to prevent oxidation of the shim coils.

When you are finished with the experiment, please leave the spectrometer at room temperature so the next group can use it. You have to allow approximately 10 minutes for every 20 degrees that the probe needs to be cooled down.

IV. Data Analysis

The calculations and graphs called for in the following sections should be done immediately as the spectra are obtained. One partner should do the calculations while the other is recording spectra and then switch halfway through each half of the experiment. The few microliters of t-butanol added can be ignored in the mole fraction calculations.

³ To avoid having to do this for the six room-temperature runs, check the temperature reading of the spectrometer and use that as the temperature of the experiment. You can assume that the inside and the outside of the probe are at the same temperature.

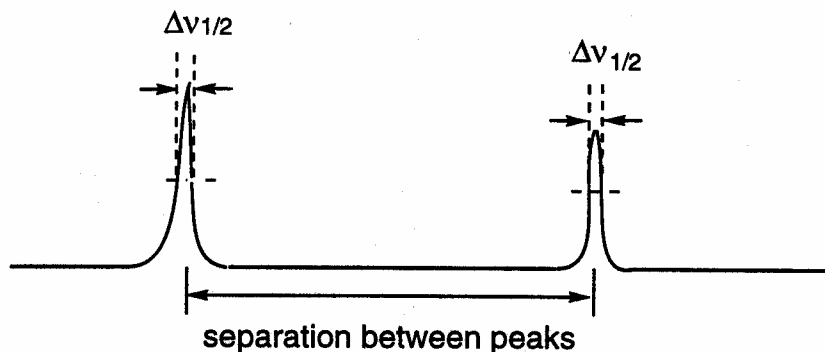
A. Theory of the NMR Spectrum

You should be aware that you are using a pulsed FT-NMR spectrometer, not a continuous-wave (CW) one as you may have done in earlier laboratories. The pulsed NMR spectrometer transmits a pulse over the entire spectral width at once. The free induction decay (FID) of the signal emitted by the excited protons is observed and converted to a frequency-domain spectrum with the use of Fourier Transforms⁴. **The FID is the rate of decay of the excited nuclear spins.** The value of dynamic NMR lies in that it allows the study of reactions with half-lives close to the half-life for the relaxation of a magnetically active nucleus in the system.

The spectrum of pure pyruvic acid consists of two resonances at 9.3 ppm and 1.6 ppm which are due to the carboxyl proton and the methyl protons, respectively. The separation of the two is dependent upon the purity of the sample; the greater the purity, the greater the separation.

The spectrum of an aqueous solution of pyruvic acid consists of three bands. The bands at 2.6 ppm and 1.75 ppm represent the resonances of the methyl protons of pyruvic acid and 2,2-dihydroxypropanoic acid, respectively, while the third band which represents the resonances of the carboxyl, hydroxyl, and water protons appears at variable positions in the spectrum dependent upon the composition of the mixture. This latter band is a singlet since the proton exchange rate between the three different environments is fast compared with the time of transition between different magnetic environments.

The quantity you will be measuring in the experiment is the linewidth at half the peak height (FWHM or $\Delta\nu_{1/2}$), as show below:



The full width of the exchange broadened bands at half the band height is inversely proportional to the net relaxation time (T_2) for the proton, so that

$$\Delta\nu_{1/2} = \text{FWHM (in Hertz)} = \frac{1}{\pi T_2} \quad (2)$$

with

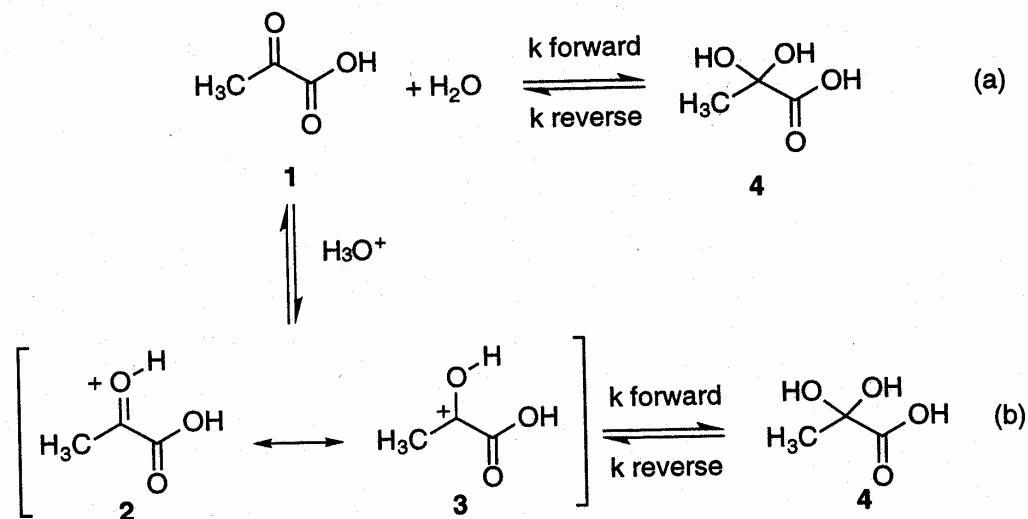
⁴ For a discussion of Fourier Transforms, see Friebolin (*op. cit.*), Chapter 1, and Appendix A of this Manual.

$$\frac{1}{T_2'} = \frac{1}{T_2} + \frac{1}{\tau} \quad (3)$$

where T_2' is the relaxation time of the fully exchanged protons and T_2 the relaxation time in the absence of exchange; thus τ is the mean lifetime of the proton.

B. Reaction Kinetics

In principle, the reaction between pyruvic acid and water could follow either an uncatalyzed or an acid (H^+)-catalyzed path, as shown below. Are there any other mechanisms possible?



In part III(C) you measure the uncatalyzed and acid-catalyzed exchange rates at ambient temperature (approx. 25 °C); in part III (D), you measure the temperature dependence of the exchange rates. As either the temperature or the H^+ concentration is increased, so the rate of exchange between the pyruvic acid form and the 2,2-dihydroxypropanoic acid form is increased. As this happens, the bands due to the methyl protons in these forms will broaden.

The reciprocal of the mean lifetime τ is equal to specific rate of the reaction in a particular environment. The specific rate in turn is equal to $k_0 + k_{H^+} [H^+]$, where k_0 is the sum of the rate constants of the uncatalyzed reaction and dipole relaxation process. The rate of the acid-catalyzed reaction is proportional to the concentration of protonated pyruvic acid, which is in turn proportional to the $[H^+]$ concentration. Thus, the acid-catalyzed rate is $k_{H^+} [H^+]$, and Eq. 3 can be written in the form of eq. 4.

$$\frac{1}{T_2} = \text{constant} + k_{H^+} [H^+] = \left[\frac{1}{T_2} + k_0 \right] + k_{H^+} [H^+] \quad (4)$$

Thus, a plot of $1/T_2'$ versus $[H^+]$ should yield a straight line with a slope equal to the value for the acid-catalyzed rate constant. By measuring the bandwidth at half-height of methyl resonances in the spectra of pyruvic acid and 2,2-dihydroxypropanoic acid at different acid concentrations, the acid-catalyzed rate constants for the forward and back reactions may be determined. Also, by measuring the integrated areas of the methyl resonances, the equilibrium constant for the system should be evaluated.

The Arrhenius theory of reaction rates predicts a temperature dependence of the rate constant given by

$$k = A \exp(-E_{act}/RT) \quad (5)$$

where E_{act} is the activation energy for the reaction, interpretable as the energy required to reach a "transition state" or "activated complex" intermediate between reactants and products, and A is a unit-bearing pre-exponential factor. Eq. (5) leads to the so-called Arrhenius plot,

$$\frac{d \ln(k)}{d \frac{1}{T}} = -\frac{E_{act}}{R} \quad (6)$$

Thus, a plot of $\ln(k)$ vs. reciprocal absolute temperature should be a straight line of negative slope, with the magnitude of the slope equal to the activation energy in units of the gas constant R. You are to find the activation energies for both the forward and reverse uncatalyzed reactions by plotting the values for both pyruvic acid and 2,2-dihydroxypropanoic acid vs. reciprocal absolute temperature of the sample. Also determine the equilibrium constant as a function of temperature from the integrated areas of the methyl resonances, as you did previously for the acid-catalyzed reaction.


From the Principle of Detailed Balancing, the forward and reverse rate constants for any reaction pathway must be related as follows:

$$\frac{k^{forward}}{k^{reverse}} = K_{equilibrium} \quad (7)$$

From Eq. (6), we must have:

$$\frac{d \ln K_{eq}}{d \frac{1}{T}} = \frac{d \ln k^{forward}}{d \frac{1}{T}} - \frac{d \ln k^{reverse}}{d \frac{1}{T}} \quad (8)$$

$$= -\frac{1}{R} (E_{act}^{forward} - E_{act}^{reverse}) \quad (9)$$



"But Gershon, you can't call it Gershon's equation if everyone has known it for ages."

But we also know from the Gibbs-Helmholtz equation that:

$$\frac{d \ln K_{eq}}{d \frac{1}{T}} = -\frac{\Delta H^{\circ}}{R} \quad (10)$$

where ΔH° is the standard enthalpy change in the reaction; thus, we should have

$$E_{act}^{forward} - E_{act}^{reverse} = \Delta H^{\circ} \quad (11)$$

From the measured equilibrium constants at various temperatures, find ΔH° using Eq. (10), and compare this value with the difference between the measured forward and reverse activation energies.

V. Notebook and Discussion

Record all procedures and observations carried out in preparing the solutions in your notebook. Incorporate all spectra as described in the "General Directions" handout for the course. All of the calculations called for above in Section IV may be done in the notebook. Do not do them on scratch paper and later copy the graphs and plots directly on the notebook paper to see what they look like but redo them on good graph paper for quantitative results. If a computer is used, printouts should be incorporated with the report.

Discuss sources of error in the data. What is the largest source of error? Calculate standard errors on line fit parameters. Is the observed data scatter consistent with your error estimates? Discuss the results of your calculations and data analysis in terms of the theory on which they are based as presented in section IV above and in the references of section II. Also, discuss each of the points raised and answer the questions posed in the following for each of the sections of the experiment.

1. List the chemical shifts of the signals observed in the spectrum of pyruvic acid and hence comment on the purity of the pyruvic acid.
2. Calculate the chemical shifts and assignments of signals observed in the spectrum of solution (1). Calculate the equilibrium constant for the pyruvic acid - 2,2-dihydroxypropanoic acid system in solution (1).
3. Measure the band widths at half-height of the methyl resonances in the spectra of solutions (1) - (6). Summarize the results in a table of the following form:

BAND WIDTHS $\frac{1}{T_2'}$

		Pyruvic Acid		Hydrate	
Solution #	HCl conc. (M)	Hz	Rad/s	Hz	Rad/s

4. Plot the values for $(1/T_2')$ for pyruvic acid and 2,2-dihydroxypropanoic acid in water (using a logarithmic scale) against the reciprocal absolute temperature and hence determine the activation energies for the uncatalyzed rate constants, $E_{act}^{forward}$ and $E_{act}^{reverse}$. Also find H° for the reaction by plotting your equilibrium data according to Eq. (11), and compare the value you obtain with the difference of the activation energies. Comment on possible sources of error. Should ΔH° be the same or different for the acid-catalyzed and the uncatalyzed reactions? Does $K_{equilibrium}$ change as a function of $[H^+]$? Why?